

Hoeveel vroeger is het? (hele en halve uren) [2]

Oefening 1

1.  

uur en minuten

.....

2.  

uur en minuten

.....

3.  

uur en minuten

.....

4.  

uur en minuten

.....

5.  

uur en minuten

.....

Oefening 2

1.  

uur en minuten

.....

2.  

uur en minuten

.....

3.  

uur en minuten

.....

4.  

uur en minuten

.....


5.  

uur en minuten


.....

Antwoorden: Hoeveel vroeger is het? (hele en halve uren) [2]


Oefening 1




3 uur en 30 minuten




3 uur en 0 minuten



7 uur en 30 minuten




0 uur en 30 minuten




9 uur en 0 minuten

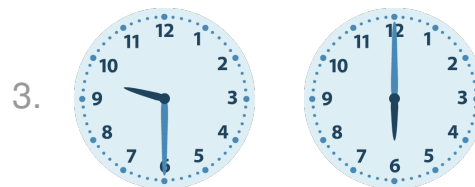
Oefening 2




10 uur en 0 minuten



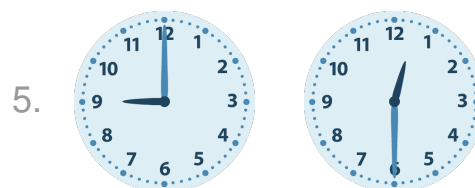
4 uur en 0 minuten



3 uur en 30 minuten



6 uur en 30 minuten



8 uur en 30 minuten

